
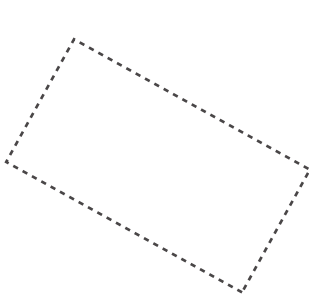



Name: _____

Date: _____

Rectangle

Trace these rectangles:



Draw some rectangles below:

A rectangle is a 2D shape that has 4 sides, 4 corners, and 4 right angles.

